



**STANDARDHIGH SCHOOL – ZZANA
LINKED SCHOOLS EXAMINATION PROGRAMME**

**PRE-PRIMARY LEAVING EXAMINATION
SST
TIME:**

Index No.									
-----------	--	--	--	--	--	--	--	--	--

Candidate's Name:

Candidate's Signature:

School Name:

District :.....

Read the following instructions carefully:

FOR EXAMINER'S USE ONLY

1. This paper has **two** Section **A** and **B**.
2. Answer **all** questions. **All** answers to both Sections **A** and **B** must be written in the spaces provided.
3. **All** answers must be written using a blue or black ball-point pen or ink. Diagrams should be drawn in pencil.
4. **No** calculators are allowed in the examination room.
5. Unnecessary changes of work may lead to loss of marks.
6. Any handwriting that cannot easily be read may lead to loss of marks.
7. Do **not** fill anything in the boxes indicated **“For Examiners’ Use Only”** and those inside the question paper.

Qn. No.	Marks	Examiner's No.
1 – 6		
7 – 11		
12 – 17		
18 – 21		
22 – 23		
24 – 26		
27 – 29		
30 – 31		
32		
TOTAL		

Turn Over

SECTION A
Question 1 – 40 carry one mark each

1. Name any one important place in our district where people get medical services?

2. What does the yellow colour represent on the Uganda Flag?

3. Give any one advantage of having a recycling industry in the community

4. Why did the colonialists introduce taxes in their African territories?

5. Which factor favour the growing of Arabic Coffee on the slopes of Mt. Elgon.

6. Give one reason why a person may fail to understand symbols used on a map

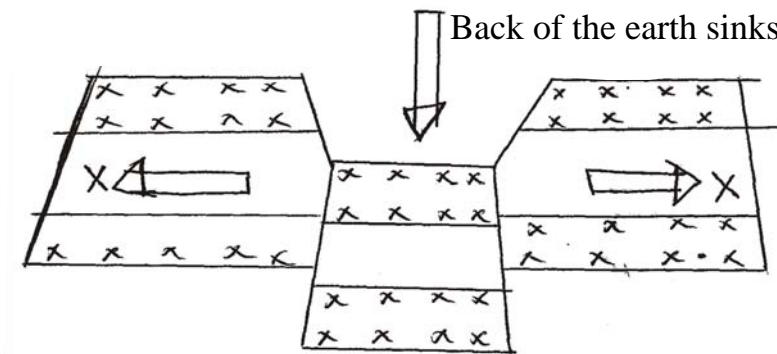
7. Give any one reason why people practice poaching in Uganda?

8. Which organization United African countries after independence?

9. Mention any one tribe of the Plain Nilotes in Uganda ?

10. How are lakes useful to farmers in the community?

Study the diagram below and answer numbers 11 and 12



11. Name the forces marked with letter X in the diagram.

12. Name any one physical feature formed by the forces above.

13. Why are the shores of Lake Victoria densely populated?

14. Give one reason why the Arabs came to East Africa?

15. Name any one human activity that can destroy the environment.

16. In which way is Uganda different from Tanzania in terms of location?

17. State any one role of Uganda Revenue Authority (URA)?

18. Name the line of latitude marked $23\frac{1}{2}^{\circ}$ S.

19. Give one example of a drainage feature in Uganda

20. Give any one problem caused by landslides in Bududa District.

21. Draw a map symbol of a dam.



22. Name the agency of United Nations responsible for promoting culture.

23. State any one way children lead to violation of their rights.

24. Give the political importance of River Kagera to Uganda and Tanzania?

25. Give any one reason why children should be given informal education ?

26. Give a reason why a National Flag can be flown at half mast?

27. How are deciduous trees able to survive dry conditions in Tropical climate?
-
28. Give any one negative effect of Long Distance Trade in East Africa?
-
29. Give any one way Africans demanded for their independence
-
30. Why did the Portuguese build Fort Jesus?
-
31. Give one reason why North-Eastern part of Uganda experience Semi-Desert climate?
-
32. Who was the founder of the Chwezi dynasty?
-
33. How does deforestation affect the climate of an area?
-
34. Give one way of growing crops in semi-desert areas of East Africa.
-
35. Give any one role of the President in Uganda.
-

For questions 36 – 40, answer Either Christianity or Islam but not BOTH alternatives in a number.

36. **EITHER:** How does one become a Christian?

OR: How does one become a Moslem?

37. **EITHER:** Name the fasting period for Christians.

OR: Name the fasting period for Moslems.

38. **EITHER:** Give one way teenage pregnancy can cause suffering to a Christian.

OR: Give one way teenage pregnancy can cause suffering to a Moslem.

39. **EITHER:** How did St. Stephen meet his death?

OR: How did Sumayyah meet her death?

40. **EITHER:** Name one Prophet in the Bible who went to heaven alive.

OR: Name one Prophet in Islam who went to heaven alive.

SECTION B

41. a) Name any two products of petroleum.

i) _____

ii) _____

b) State any two ways people will benefit from oil mining around Lake Albert.

i) _____

ii) _____

42. What is a forest?

b) Give any one value of forests to people.

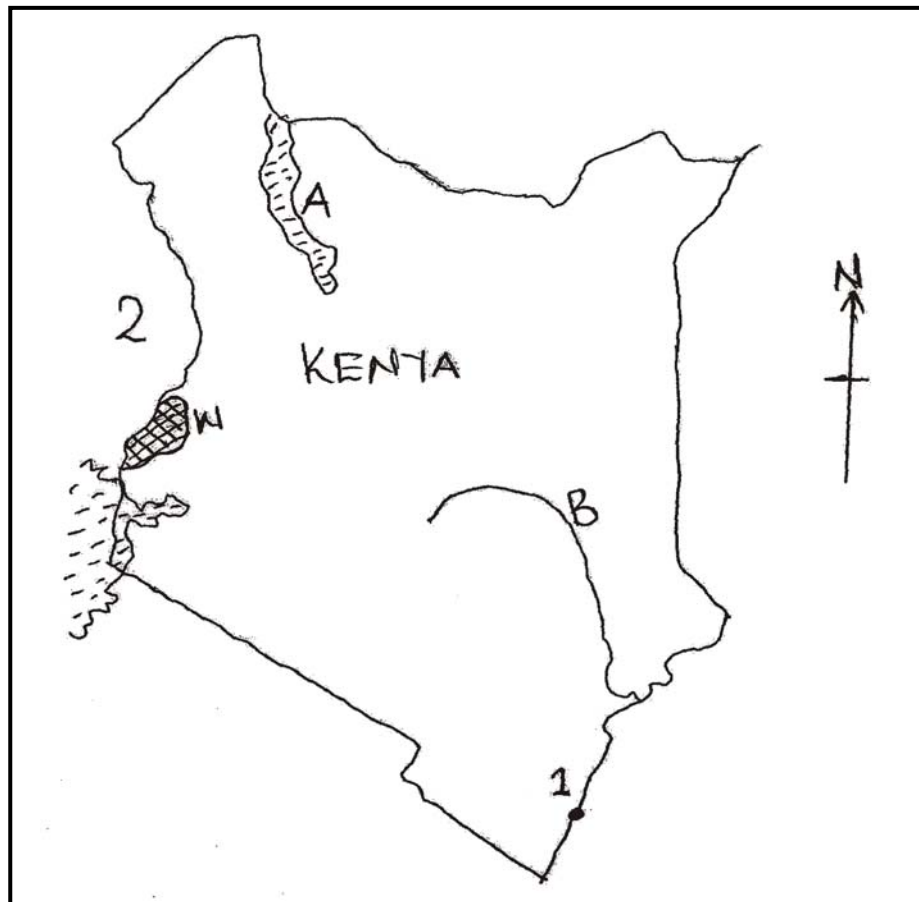
i) _____

c) Give any two factors that have led to reduction of natural forests in Uganda

i) _____

ii) _____

43. Study the map below and answer questions about it.



a) Name features marked;

A _____

B. _____

b) How does town 1 above contribute to the economic development of Uganda?

c) What title was given to the leader of the Kingdom marked W on the map?

44. a) Name the climatic region which is warm and wet throughout the year

b) State any two ways people can improve the climate of Africa.

i) _____

ii) _____

c) How do the Harmattan winds affect the climate of West Africa?

45. a) Which mineral favoured the building of cement factory in Tororo?

b) Give any two ways people benefit from the cement factory in Tororo.

i) _____

ii) _____

46. a) Draw and name any two traditional means of communication.

b) Give any two advantages of modern means over traditional means of communication.

i) _____

ii) _____

47. a) Give any one reason why missionaries came to East Africa?

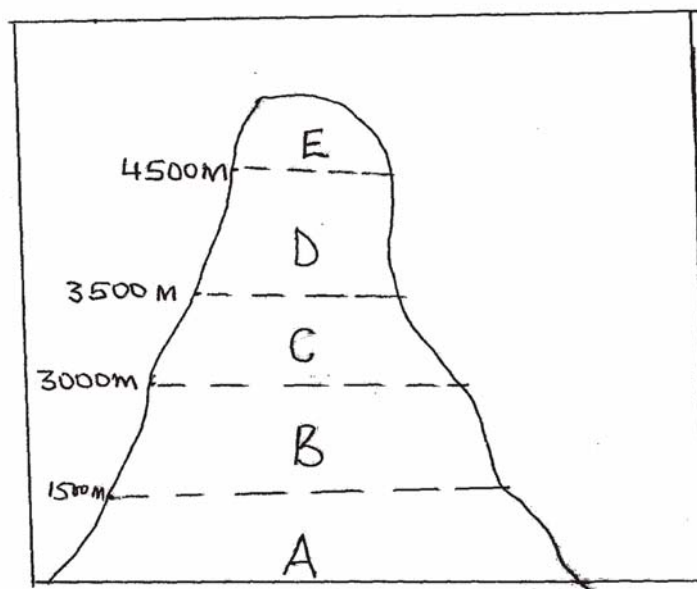
b) State any two contributions of missionaries in East Africa.

i) _____

ii) _____

C) Give any one problem missionaries faced in East Africa.

48. The diagram below shows a cross section of Montana vegetation. Study it and answer questions about it correctly.



a) Name the vegetation zones marked;

A _____

B _____

b) Why is there no vegetation growing in area E?

c) State any one use of vegetation marked C to people

49. a) What is population growth?

b) State any two factors that lead to population growth.

i) _____

ii) _____

c) Give any one problem faced by a country with a low population.

50. Match list A to B correctly.

A
i) Pyrethrum

ii) Tobacco

iii) Cotton

iv) Oil Palm

B
- Clothes
- Cigarettes
- Cooking oil
- Insecticides

i) Pyrethrum _____

ii) Tobacco _____

iii) Cotton _____

iv) Oil Palm _____

For questions 51 – 55, answer EITHER Christian OR Islam but not both alternatives in a number.

51. a) **EITHER:** Name the son of Jacob who was sold by his brothers to Egypt.

b) Why did Jacob's sons sell their brother to Egypt?

c) Give any two ways Christians can overcome sin.

i) _____

ii) _____

OR: a) Name the son of prophet Yakuub who was sold to Egypt by his brothers

b) Why did Prophet Yakuub's Sons sell their brother to Egypt

c) Give any two ways a Moslem can overcome sin

i) _____

ii) _____

52. EITHER: a) How did Adam and Eve disobey God?

b) What punishment was given to the following creatures for disobedience?

i) Adam _____

ii) Eve _____

iii) Serpent _____

OR: a) How did Adam and Hawa disobey Allah?

b) What punishment was given to the following creatures for disobedience.

i) Adam _____

ii) Hawa _____

iv) Snake _____

53. EITHER: a) Name the day when Christians celebrate Jesus death.

b) Why is Jesus death important to Christians?

c) Give any two reasons why a Christian should not fear death.

i) _____

ii) _____

OR: a) Name the Angel in Islam who will blow a trumpet for all people to die on the day of judgment.

b) Why will the Angel blow the second trumpet

c) Give any two reasons why a muslim should not fear death

i)

ii)

54. EITHER a) What is prayer?

b) Give any two reasons why Christians pray.

iii)

iv)

c) Mention any one type of prayer in Christianity.

i)

OR: a) what is Salat?

b) Give any two reason why Moslems pray.

i)

ii)

c) Mention any one type of prayer in Islam.

55. EITHER: a) Give any two ways Jesus showed love for people.

i) _____

ii) _____

b) Give any two ways a Christian child can show love to an elderly person.

i) _____

ii) _____

OR a) Give any two ways Prophet Muhammad showed love for people.

i) _____

ii) _____

b) Give any two ways a Muslim child can show love to an elderly person.

i) _____

ii) _____